



## MATHEMATICS Ch -8 TENS AND ONES

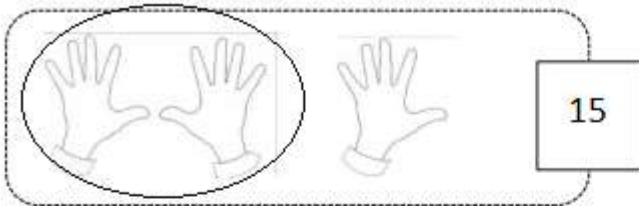
Name : \_\_\_\_\_

Date \_\_\_\_\_

Class: II Sec: \_\_\_\_\_

Circle ten. How many tens and ones?


1.



is the same as

1 ten and 5 ones.


2.



is the same as

\_\_\_\_\_ ten and \_\_\_\_\_ ones.

3.



is the same as

\_\_\_\_\_ one and \_\_\_\_\_ tens.


4.



is the same as

\_\_\_\_\_ ten and \_\_\_\_\_ ones.

5.



is the same as

\_\_\_\_\_ ten and \_\_\_\_\_ ones.



Name: \_\_\_\_\_

**Tens and Ones**

- a. 34 = \_\_\_\_\_ tens \_\_\_\_\_ ones
- b. 72 = \_\_\_\_\_ tens \_\_\_\_\_ ones
- c. 50 = \_\_\_\_\_ tens \_\_\_\_\_ ones
- d. 69 = \_\_\_\_\_ tens \_\_\_\_\_ ones
- e. 8 = \_\_\_\_\_ tens \_\_\_\_\_ ones
- f. \_\_\_\_\_ = 2 tens 3 ones
- g. \_\_\_\_\_ = 6 tens 0 ones
- h. \_\_\_\_\_ = 0 tens 4 ones
- i. \_\_\_\_\_ = 3 tens 1 ones



**Place Value Writing**

number	tens and ones	expanded form
19	____ tens ____ ones	____ + ____ = ____
13	____ tens ____ ones	____ + ____ = ____
16	____ tens ____ ones	____ + ____ = ____
11	____ tens ____ ones	____ + ____ = ____
14	____ tens ____ ones	____ + ____ = ____
15	____ tens ____ ones	____ + ____ = ____

